

Measuring WEIGHT CLASS-I 8 Oct 2020

A



B



C



D



E




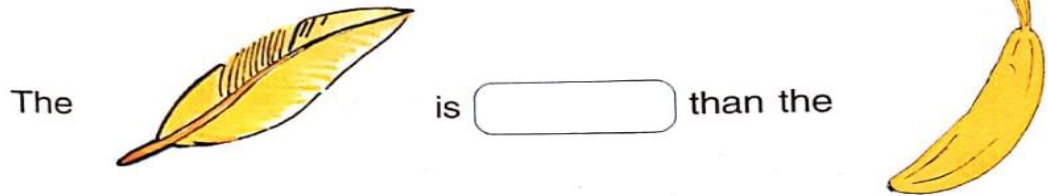
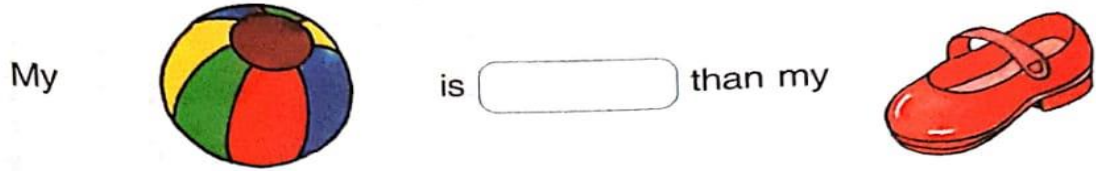


F



WEIGHT

Feel the weight of the following objects. Write **heavier** or **lighter** in the box.











heavier

lighter









heavier

lighter

Tick (✓) the **heavier** ones.

 <input type="checkbox"/>	 <input type="checkbox"/>	 <input type="checkbox"/>	 <input type="checkbox"/>
 <input type="checkbox"/>	 <input type="checkbox"/>	 <input type="checkbox"/>	 <input type="checkbox"/>

Tick (✓) the **lighter** ones.

 <input type="checkbox"/>	 <input type="checkbox"/>	 <input type="checkbox"/>	 <input type="checkbox"/>
 <input type="checkbox"/>	 <input type="checkbox"/>	 <input type="checkbox"/>	 <input type="checkbox"/>



H H

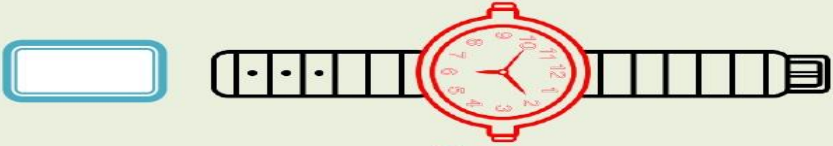
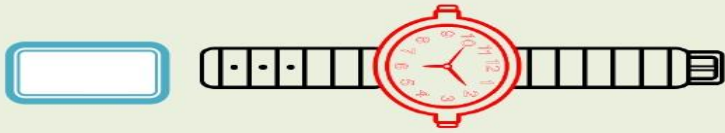
L H H

L L


H L

Write 1 to 3 to show the order from shortest to longest object.

1)



2)



3)



4)



1

2

3

1

2

3

1

2

3

1

3

2

Compare the following animals in terms of height and answer the questions.



1. Who is the shortest? _____
2. Who is the tallest? _____
3. Giraffe is _____ than Tiger.
4. Cat is _____ than Elephant.
5. Tiger is _____ than Dog.
6. Elephant is _____ than Giraffe.
7. Dog is _____ than Cat.
8. Cat is _____ than Tiger.

taller

taller

shorter

taller

shorter

Mouse

shorter

taller

giraffe



Well Done !