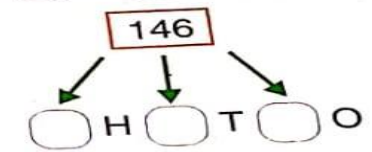
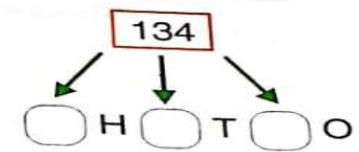
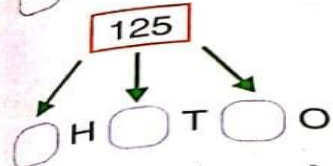
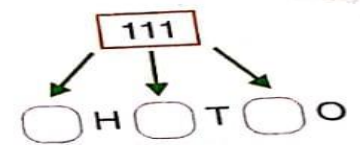
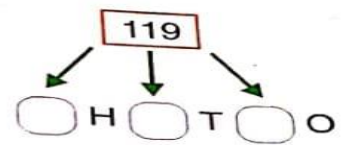
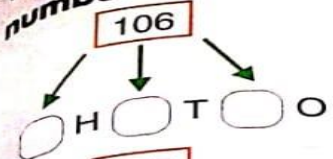


Concept of Hundred Class -I

Date: 21 Oct 2020



Write down the **hundreds, tens and ones** in these numbers.



What number does the abacus show? Write in the .

$100 + 10 + 0 = 110$

$+ + =$

$+ + =$

$+ + =$

$+ + =$

$+ + =$

- 6
- 1
- 1
- 5
- 1
- 2
- 1
- 1
- 1
- 0
- 1
- 4
- 1
- 4
- 3
- 1
- 9
- 6

- 23
- 150
- 100
- 161
- 151
- 108
- 100

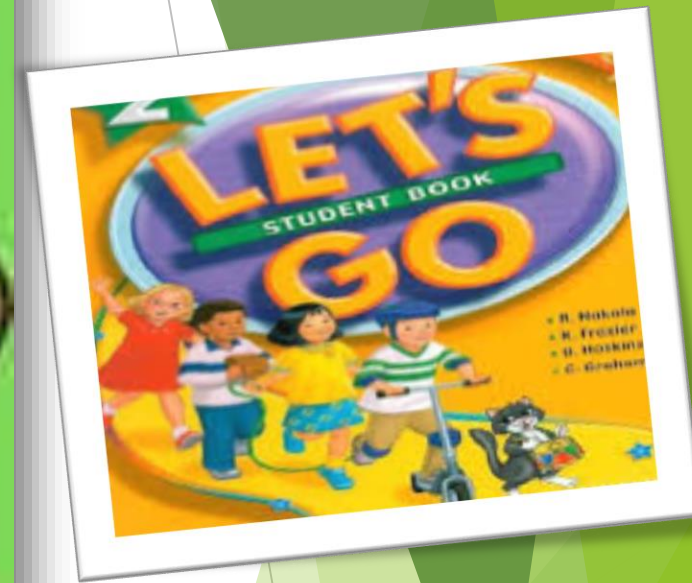
Missing counting

100 ? ? 103 104 ? 106 ?

129 ? 131 ? ? 134 ? ?

110 ? ? 113 ? ? 116 ?







Well done!