

## REVISION

Class I ( 9.11.20)

➤ Write number names: 8

1) 70 \_\_\_\_\_

5) 89 \_\_\_\_\_

2) 99 \_\_\_\_\_

6) 55 \_\_\_\_\_

3) 68 \_\_\_\_\_

7) 100 \_\_\_\_\_



4) 19 \_\_\_\_\_

8) 83 \_\_\_\_\_

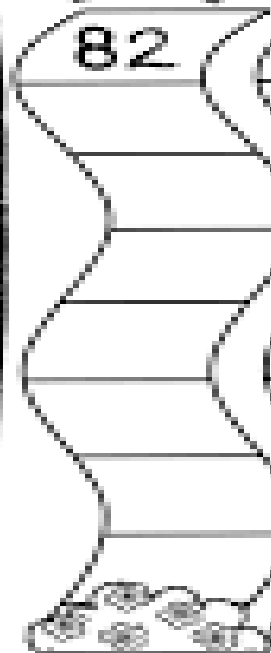
➤ Fill in the missing numbers: 4

### Backward Counting

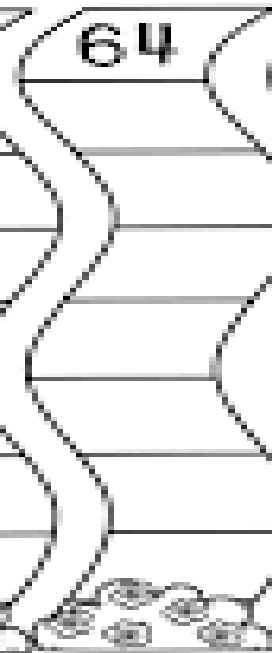
from 100

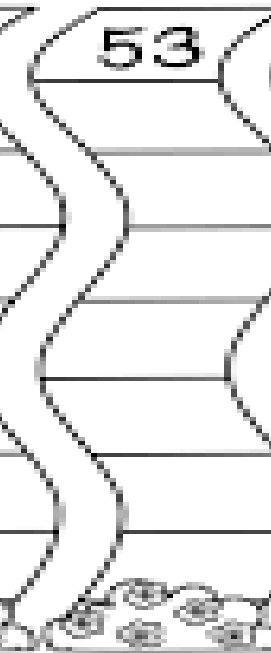
82



64



53



77

