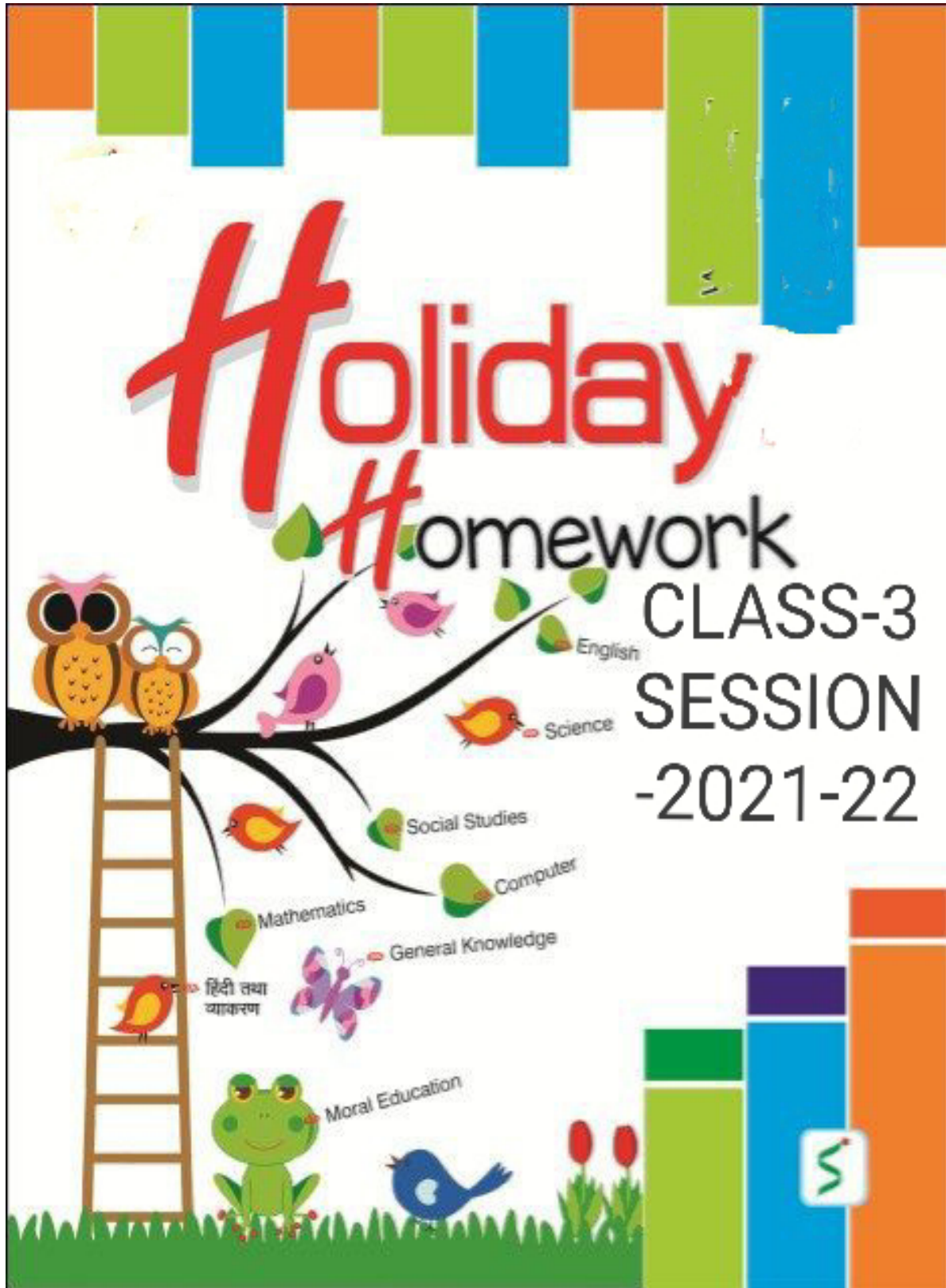


DAV PUBLIC SCHOOL ,BARIATU, RANCHI





D. A.V. PUBLIC

SCHOOL, BARIATU

Holiday Homework (2021-2022)

CLASS-III

SUBJECT - MATHEMATICS

Q1) Solve the following :-

a) TH H T O

3 3 2 7
+. 6 5 8 1

b) TH H T O

8 0 0 0
- 3 5 2 5

c) TH H T O

4 3 4
× 1 2

Q2) Fill in the blanks :-

When we add 100 to 720, the digit at _____ place increases by 1.

$70 - 10 = 120 - \underline{\hspace{2cm}}$

$\underline{\hspace{2cm}} + 63 = 42 + \underline{\hspace{2cm}}$

$30 \times 1000 = \underline{\hspace{2cm}}$

33, 43, _____, _____, _____

Q3) Word Problems

a) Rahul had 2359 stamps. Out of these, 1985 are Indian stamps and rest are foreign stamps. How many foreign stamps did he have?

b) In an orchard, apple trees are planted in rows. There are 35 trees in one row and there are 42 such rows. How many apple trees are there in the orchard?

c) Write the number which is 326 more than the smallest 4-digit number.


Q4) Solve the puzzle :-

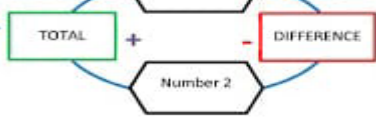
6	+		=	14
+		+		+
	+	9	=	16
=		=		=
13	+		=	

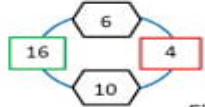
20	-	12	=	
+		+		+
25	-		=	13
=		=		=
	-		=	

Q5) Do as directed :-

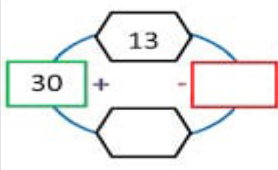
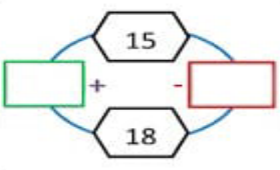
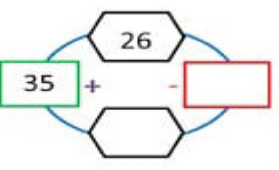
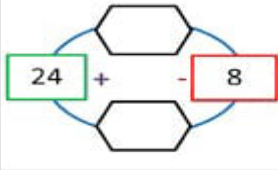
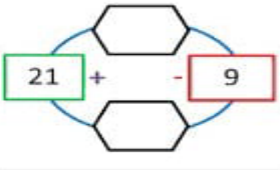
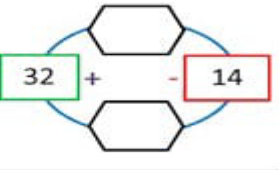
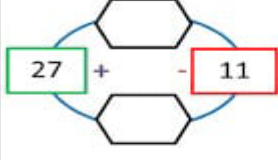
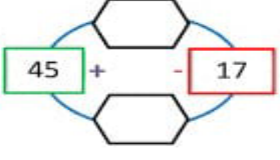
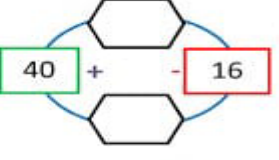
Name _____ Date _____

TOTAL DIFFERENCE PUZZLE 3C 

This is how the puzzle works! 

Example 

Fill in the missing numbers in the puzzles below!

Q6) Learn and write tables from 2 to 20.

Q7) Draw an abacus to show greatest 4-digit number.

Q8) Find these numbers in the given figure. Colour them using pencil colours or crayons.

Successor of 999 = ____ (Yellow)

$3000 + 0 + 20 + 4 =$ ____ (Yellow)

Eight thousand six = ____ (Blue)

Predecessor of 2010 = ____ (Blue)

$3000 - 756 =$ ____ (Pink)

1 hundred = ____ tens (Pink)

$9 \times 800 =$ ____ (Red)

$568 \times 10 =$ ____ (Red)

$1972 -$ ____ = 1972 (Green)

$515 \times$ ____ = 515 (Green)

Place value of 4 in 4700 = ____ (Violet)

$8 \times 4 =$ ____ $\times 8$ (Violet)

$2432 + 748 =$ ____ (Orange)


$799 + 0 =$ ____ (Orange)

50 more than 600 = ____ (Brown)

30 less than 200 = ____ (Brown)

Place value of 2 in 1927 = ____ (Purple)

$20 \times 30 =$ ____ (Purple)



Subject - Science

1. Paste/draw two pictures each of the following_
2. Herbs , Shrubs Trees, Climbers & Creepers.
3. Make a collage of different things we get from plants.
4. Collect and dry five different types of leaves and paste them in the notebook.
5. Name any five trees growing in your school and in or around your home.
6. How do you take care of your sense organs? Write five points.
7. Learn and write "Do you know" & keywords of Ch 1,2 & 3.

SUBJECT-SOCIAL SCIENCE

1. Make a family album by pasting individual photo of each member of your family and write two sentences on each of them.
2. Mention your two good habits and two bad habits.
3. Draw neatly and colour two food items you like most.
4. Draw and colour two clothes worn in summer and two clothes worn in winter.
5. Make a beautiful scenery by using vegetables like lady fingers, capsicum, onion, cabbage, potato etc. by dipping them in water or fabric colours.
6. On a political map of India mark ,color and label the followings-
 - a) Your state.
 - b) Capital of India.
 - c) State where women wear mekhla- chadder.
 - d) State where sarson-ka -saag and makki ki-roti is eaten most.

SUBJECT-COMPUTER

1. Draw a picture of mouse and label its button also color each button with different colors.
2. How many buttons does a CPU has? Name them.
3. What is the full form of VDU.
4. Look at the picture and identify the device.

a.



b.



5. Write the places where you have seen a computer and also write the purpose or uses of Computer at that place. (Any Five)

हिन्दी ग्रीष्मावकाश कार्य

कक्षा-3

1. प्रतिदिन एक पृष्ठ सुलेख लिखें।
2. पढ़ाए गए पाठों का अध्ययन एवं अभ्यास करें।
3. पाठ- 2 से 7 तक का शब्दार्थ लिखें।
4. संज्ञा एवं क्रिया की परिभाषा एवं उदाहरण लिखें।
5. अखरोट या बादाम के छिलकों का प्रयोग करते हुए चित्र बनाएँ।
6. वर्तमान परिस्थिति पर अपने अनुभव लिखें।(10 पंक्ति)

DAV PUBLIC SCHOOL, BARIATU
SUMMER VACATION HOLIDAY HOMEWORK
(SESSION: 2021-2022)

SUBJECT: ENGLISH

CLASS –III

General Instructions

- The assignments are to be done in neat and tidy handwriting.
- Assignments of all the subjects must be submitted till 21st Jun 2021.
- Make a set routine for him / her to do holiday homework regularly as regular practice improves his / her learning skills, instead of forcing them to do their holiday homework at the eleventh hour.
- Encourage your child to cultivate the Reading habit because it not only enhances the knowledge acquired but also develops the vocabulary, language skills and improves spellings. Ask your child to read newspaper & G.K book to update himself/herself.
- Make sure that the holiday assignments are done according to the above mentioned guideline. This will help your child to become a smart and an active learner.

Q.1: You are provided with 5 YouTube links. you are supposed to watch one video every day and write about the places you visited through the video and describe the things you have seen there.

- a) Day -1 <https://youtu.be/yOEDoXKpqq4>
- b) Day-2 https://youtu.be/q6z_sRs30BQ
- c) Day-3 <https://youtu.be/gD3kMcTOM14>
- d) Day-4 <https://youtu.be/IOHXsl7vDow>
- e) Day-5 <https://youtu.be/00ZXaXIABMY>

Q.2: Which of the two words given in the bracket is correct. Choose the correct options and correct the sentences.

- a. The flowers (is / are) beautiful things.
- b. This book (is / are) very interesting.
- c. Birds build their (nest / nests) in trees.
- d. (These/ This) children have bad teeth.
- e. The women with their daughters (was / were) present.
- f. Lives of great men (teach / teaches) us how to live nobly.
- g. This sheep (has / have) no wool on it.
- h. Monkeys (has / have) long tails.
- i. Honest servants (is / are) liked by their masters.
- j. Dogs (is /are) good friends to men.
