

English

D.A.V. Public School, Bariatu

## Holiday Homework

*Class-4.*

*Sub-English*

**1) Watch the story “The Magic Pot”  
carefully.**

**<https://youtu.be/KHzJVnY2egA>**



- i) Note down all the Nouns used in the story.*
- ii) Categorize the Nouns you have noted down into Common Noun and Proper Noun*
- iii) Categorize the Nouns according to gender-Masculine, Feminine, Common and*

*Neuter gender.*

*iv) Note down all the pronouns used in the story.*

*v) Note down difficult words (at least five) from the story and find its meaning using dictionary.*

*vi) Write down the story in your own words.*

***2) Watch the travel guide to Rajasthan.***

<https://youtu.be/8mRGnOqXpQc>



*Prepare an attractive 'Travel Ad'*

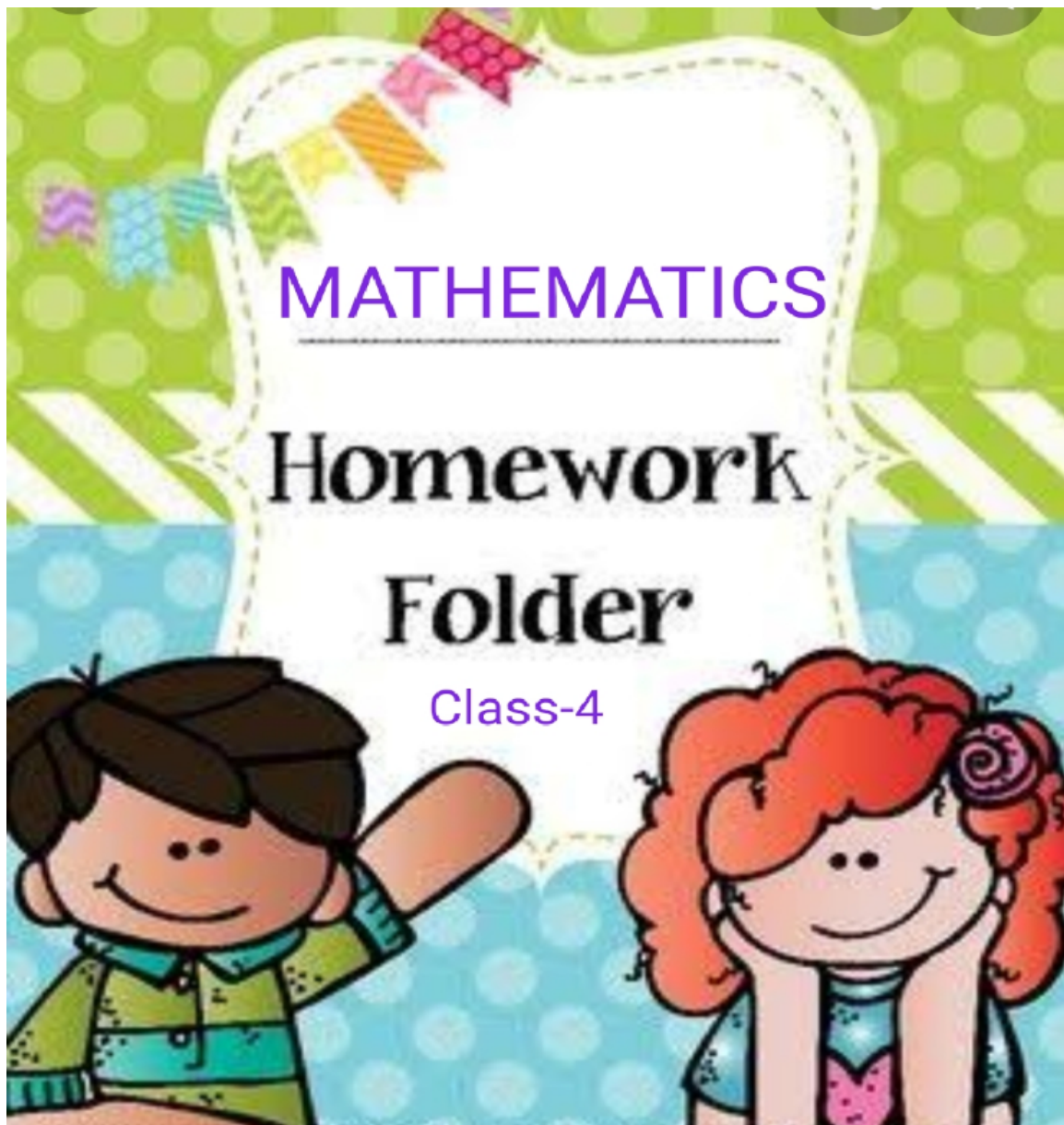
*About Rajasthan trip to be given by*

*Bitu Travels on A.4 size paper.*

***3) Read the story "A True Friend" from your textbook and prepare a video of yourself while narrating it in your own words.***



DAV PUBLIC SCHOOL, BARIATU, RANCHI -2021-22



**1** Fill in the blanks:

1.  $5000 + 40 + 5 = \underline{\hspace{2cm}}$

2.  $700 + 80 + 20 = \underline{\hspace{2cm}}$

3.  $80,000 + 8 + 800 + 80 = \underline{\hspace{2cm}}$

4. Compare by using '>', '<' or '=' in the box.

i.  $22222 \boxed{\hspace{1cm}} 2222$

ii.  $8, 87, 091 \boxed{\hspace{1cm}} 8, 78, 091$

5. 1 lakh =  $\underline{\hspace{1cm}}$  thousand.

6. The numeral just before 80, 000 is  $\underline{\hspace{1cm}}$  .

7. The places ones, tens, hundreds belong to the  $\underline{\hspace{1cm}}$  period.

8. The sum of the place value of 9 and 6 in the number 89546 is  $\underline{\hspace{1cm}}$  .

9. 700 more than the successor of 499 is equal to  $\underline{\hspace{1cm}}$  .

10.  $4129 + \underline{\hspace{1cm}} = 7000$

11. If  $45 + 35 = 80$  then  $35 + 40 = \underline{\hspace{1cm}}$  .

12.  $\underline{\hspace{1cm}} - 0 = 685$

13.  $17, 000 - \underline{\hspace{1cm}} = 7000$

14.  $8500 + 1500 = \underline{\hspace{1cm}}$  .

15.  $7256 \times 1 = \underline{\hspace{1cm}}$  .

16.  $0 \times 234 = \underline{\hspace{1cm}}$  .

17.  $543 \times 237 = 237 \times \underline{\hspace{1cm}}$

18. \_\_\_\_\_  $\div$  342 = 0

19.  $326 \div 1 =$  \_\_\_\_\_

20.  $43 \times 1000 =$  \_\_\_\_\_

21.  $20 \times 400 =$  \_\_\_\_\_

22.  $457 \div$  \_\_\_\_\_  $= 1$

2. Solve the following :-

1.  $21,364 + 3254 + 321$

2.  $45,670 - 32,917$

3.  $3,456 \times 290$

4.  $8456 \div 7$

5. Divide and check:-

$6243 \div 9$

6. Write the number names:- 2,30,947

3. Word problems:-

**1.** There are 1025 students in a school containing 25 sections. If in each section there are equal number of students, find their number in each section.



**2** The difference between two numbers is 1307. If the larger number is 9577, find the smaller one.



3



6,214 people went to the music concert on Saturday night and 3,471 people went on Sunday night . How many people saw music concerts that weekend?

4 .: Bhajan went to buy bricks. The price was given for one thousand bricks. The prices were also different for different types of bricks.

Old bricks – Rs 1200 for one thousand bricks

New bricks from Intapur – Rs 1800 for one thousand bricks

New bricks from Brickabad – Rs 2000 for one thousand bricks

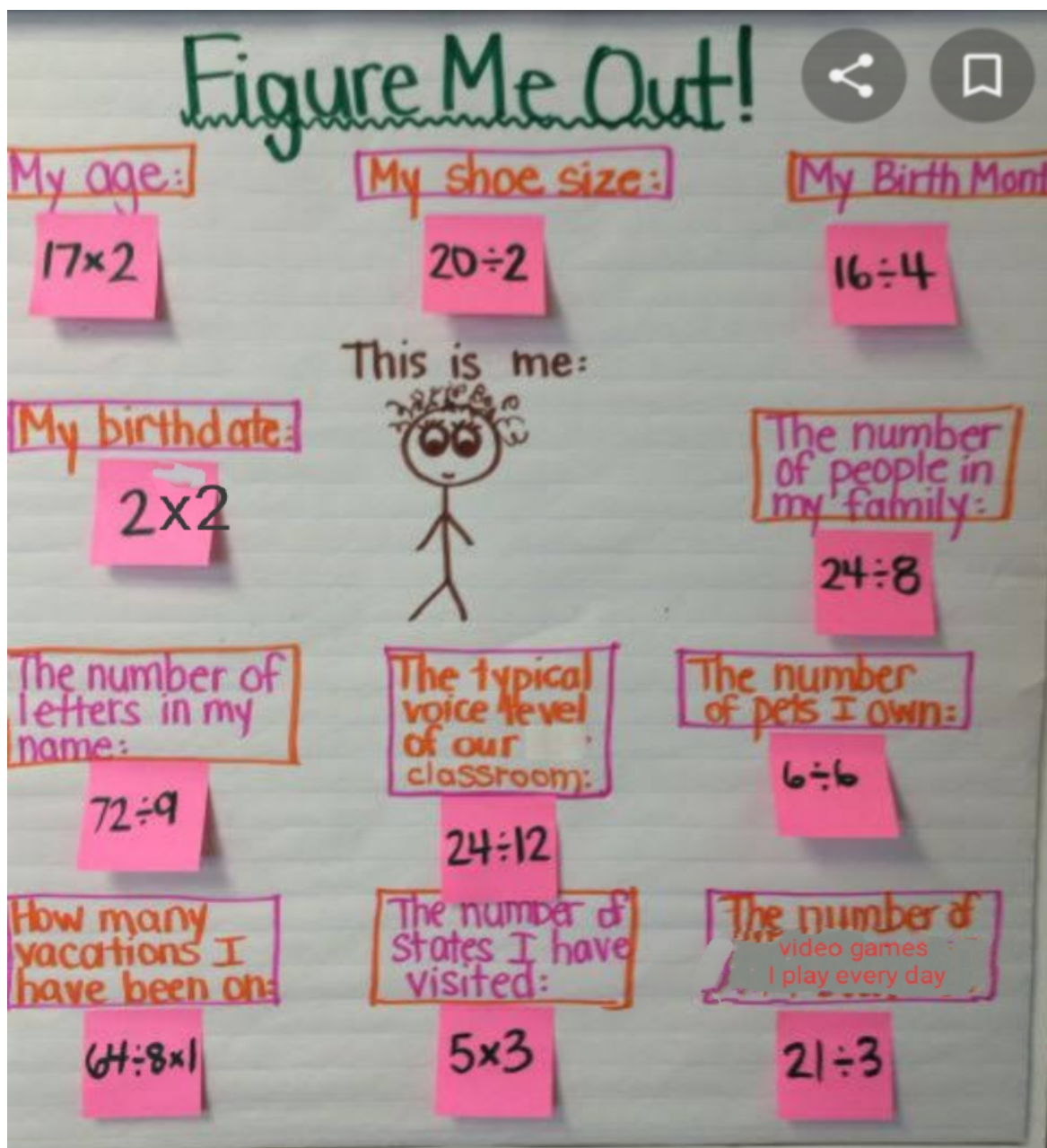
Bhajan decided to buy the new bricks from Brickabad. He bought three thousand bricks. How much did he pay? \_\_\_\_\_

\*Guess what he will pay if he buys 500 old bricks.



#### 4. Activity/ Project

- Write at least 5 activities where you required calculations during holidays.
- Make a Mathematical puzzle (Hint given in the picture ,you can use any four Mathematical operations +,-,x,÷ )



Science

**HOLIDAY HOMEWORK**

**CLASS-IV**

- 1) Draw Digestive system in A 4 size paper colour and label their organs.
- 2). Make a Model of human dentition with the help of peanuts and clay



- 3) Paste 5 flower petals / flower and write its uses
- 4) Make a food path to show digestive system in our body
- 5) Prepare a chart showing some edible roots. List down the ways in which they are usually eaten.
- 6) Learn something to know of ch 1 and ch 2

Sst

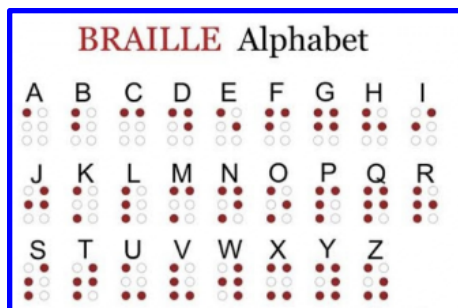
DAV Public school Bariatu, Ranchi

Holiday Homework

Subject-Social science

Class-IV

- 1 On a political map of India locate all union territories and their capitals.
2. Write "I love my Family" with Braille alphabets.



3. On a political map of India locate colour and label the following
  - a) Lokmanya Bal Gangadhar Tilak belongs to this state.
  - b) Parsis arrived in this state from Iran
  - c) Pulikkali tiger dance is popular in this state.
  - d) Ayesha ( An Ideal home) lives in this state.
  - e) Ranchi is the capital of this state.

4. **Kabad se jugad**

Make two types of dustbins

Biodegradable (Green)

Non-biodegradable (Blue)

(with plastic bottles or other waste items)

Computers

DAV PUBLIC SCHOOL BARIATU RANCHI-09  
HOLIDAY HOMEWORK (2021-2022)  
SUBJECT-COMPUTER  
CLASS- 4

1. Name the first electronic computer.
2. Write the name of the input device that you use with your smartphone.
3. Make a list of the hardware components of a computer.
4. Draw a neat and clean diagram of any one output device and also write its uses.
5. Write the shortcut keys for the following commands-
  - a. Open
  - b. New
  - c. Save
6. List the names of various machines that you find around at home or in school, under the correct column, and also write what the machine needs to perform the desired work.

Machine Name	Needs



प्रश्न 1-निम्न शब्दों के अर्थ लिखिए-

क -गायब

ख -झटपट

ग -चेतावनी

घ -कसौटी

प्रश्न 2- निम्न अनुच्छेद को पढ़कर पूछे गए प्रश्नों के उत्तर दीजिए-

भारत का राष्ट्रीय पक्षी मोर है। इसके पंख लंबे और सुंदर होते हैं। उसका रंग जामुनी, नीला,हरा और सुनहरा होता है।मोर की कलगी बहुत अनोखी होती है जो मुकुट जैसी लगती है। बादल घिरने पर मोर जब अपने पंख फैलाकर नाचता है तो बहुत सुंदर लगता है।

प्रश्न क -हमारा राष्ट्रीय पक्षी कौन है?

प्रश्न ख -मोर के पंख कैसे होते हैं?

प्रश्न ग -मोर कब नाचता है?

प्रश्न घ - निम्न शब्दों से वाक्य बनाओ -

अ -कलगी ब -बादल

प्रश्न 3- कविता की खाली पंक्तियों को अपने अनुमान के आधार पर पूरा करो -

नभ पर पर काले बादल छाए,

-----

बिजली चमकी बरसा पानी

-----

बच्चे बूढ़े सबको भाए

---

प्रश्न 4- पानी बचाना बहुत ही जरूरी है। हम कैसे पानी बचा सकते हैं, ये सोचिये और इस विषय पर 4 पंक्तियों का कोई स्लोगन लिखिए।